

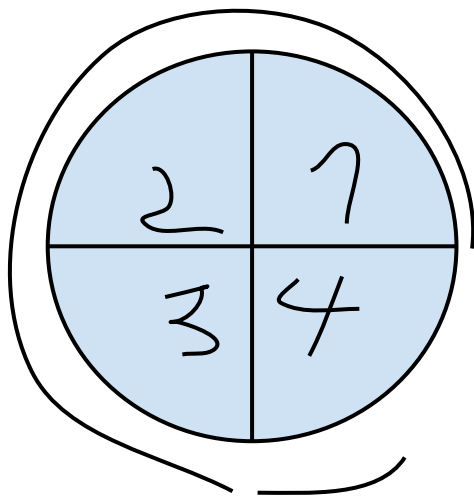
какой знак?



COS  
SIN  
CTG  
TG

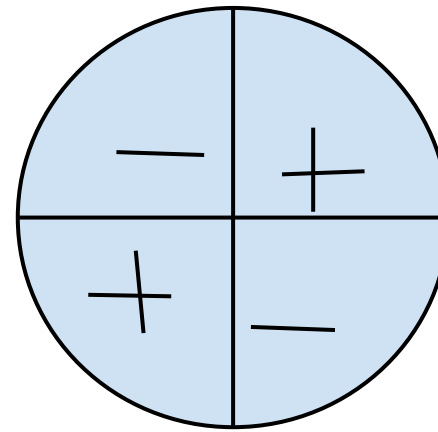
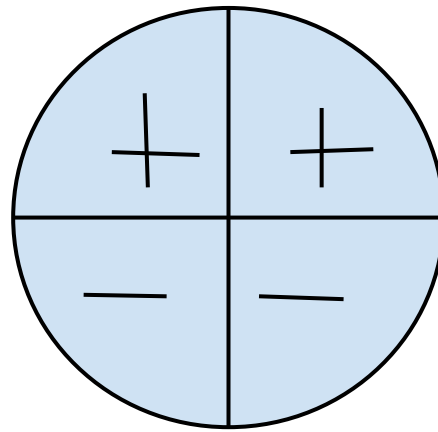
$$\sin(3P/2 + 745) = -\cos(745)$$

$$\text{tg}(P/2 + 17) = -\text{ctg}(17)$$



sin

tg ,ctg



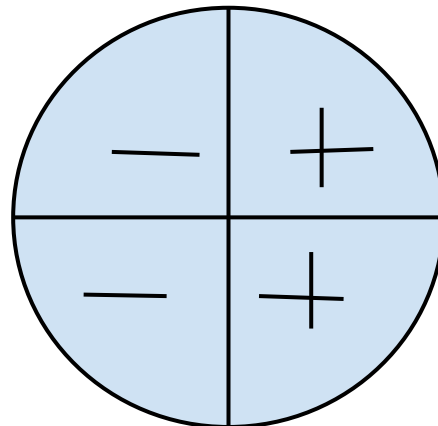
какой знак?



SIN  
COS  
TG  
CTG



COS



$$\text{tg}(P-17) = -\text{tg}(17)$$